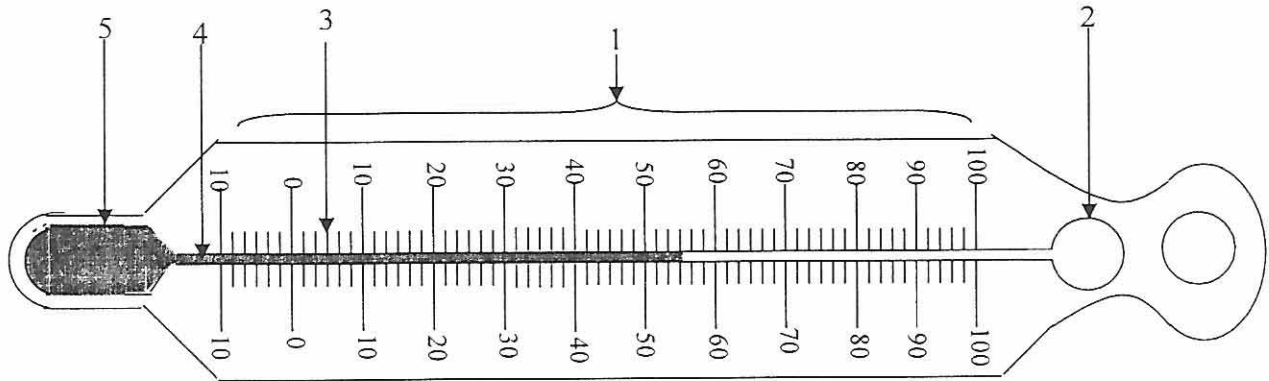


DEVOIR N°4 DE PHYSIQUE-CHIMIE DUREE : 30 minutes

NOM : **Prénoms :**

ENONCE

I. Donner le nom des éléments indiqués par les chiffres ci-dessous en complétant :



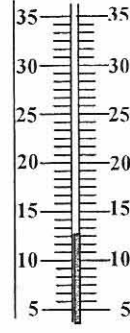
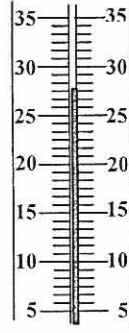
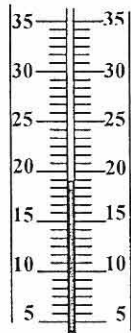
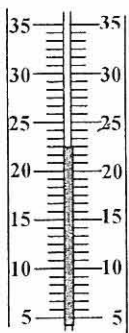
1- 5-

2-

3-

4-

II. Compléter en indiquant la température indiquée par chaque thermomètre



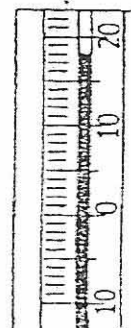
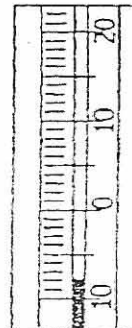



T₁=.....

T₂=.....

T₃=.....

T₄=.....

T₅=.....



Je lis.....

Je lis.....

Je lis.....

Je lis.....

Je lis.....

Je lis.....